

TIP  
flat = 100  
huis = 10  
persoon = 1



## 1. Hoeveel inwoners?

Vul in.



\_\_\_\_\_




\_\_\_\_\_



\_\_\_\_\_



\_\_\_\_\_




\_\_\_\_\_

## 2. Hoeveel flats, huizen en personen?


Vul in.

684


\_\_\_\_\_



\_\_\_\_\_




\_\_\_\_\_




193


\_\_\_\_\_



\_\_\_\_\_




\_\_\_\_\_




416


\_\_\_\_\_



\_\_\_\_\_




\_\_\_\_\_




398


\_\_\_\_\_



\_\_\_\_\_




\_\_\_\_\_




509


\_\_\_\_\_



\_\_\_\_\_




\_\_\_\_\_




283


\_\_\_\_\_



\_\_\_\_\_



\_\_\_\_\_



### 3. Hoeveel moet erbij tot het volgende 100-tal?

Vul in.

$438 + \underline{\quad\quad\quad} = 500$

$643 + \underline{\quad\quad\quad} = 700$

$84 + \underline{\quad\quad\quad} = 100$

$249 + \underline{\quad\quad\quad} = 300$

$481 + \underline{\quad\quad\quad} = 500$

$817 + \underline{\quad\quad\quad} = 900$

$108 + \underline{\quad\quad\quad} = 200$

$338 + \underline{\quad\quad\quad} = 400$

$351 + \underline{\quad\quad\quad} = 400$

$782 + \underline{\quad\quad\quad} = 800$

$766 + \underline{\quad\quad\quad} = 800$

$169 + \underline{\quad\quad\quad} = 200$

$979 + \underline{\quad\quad\quad} = 1000$

$267 + \underline{\quad\quad\quad} = 300$

$617 + \underline{\quad\quad\quad} = 700$

### 4. Zoek de getallen die samen een 100-tal vormen.

Maak vast.

